

GWALIOR GLORY SCHOOL

SUMMER HOLIDAY HOMEWORK MATHEMATICS (2021-22)

Class : II

All the work to be done in MATHS NOTEBOOK.

Q.1 Read the instruction given and solve the squares.

- (1) Write the numbers 1, 2, 4, 6, 7, 8 in the correct place so that each side of the square adds up to 15.

1 2 4 6 7 8

Total must be 15

5		
3		


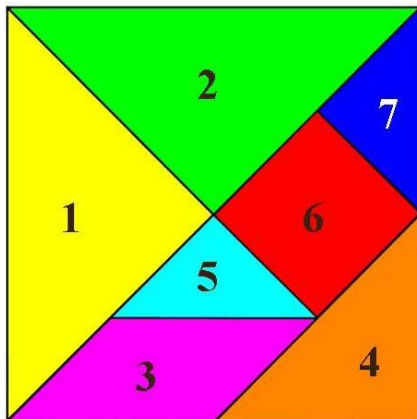
- (2) Can you write the numbers 1, 2, 4, 6, 7, 8 in the correct place so that each side of the square adds up to 12?

1 2 4 6 7 8


Total must be 12

	5	
		3

Q.2 Cut the different shapes of Tangram and make any one of the given image in your notebook.



Q.3 By moving 2 matchsticks, what is the biggest possible number you can make.



Q.4 Draw the missing shapes in the correct square. Each shape must only appear once in each row and column.

○	□		+
△		○	□
□	△	+	○
+			△

Q.5 Make a beautiful collage or rangoli design in your notebook using various geometrical shapes.

Q.6 Note down the maximum & minimum temperature of a week in June.

	Maximum Temperature	Minimum Temperature
1 st day	_____	_____
2 nd day	_____	_____
3 rd day	_____	_____
4 th day	_____	_____
5 th day	_____	_____
6 th day	_____	_____
7 th day	_____	_____

Q.7 Write the number of runs made by the winning team of IPL in semi final and final match and write the face value of digits.

Q.8 Move one matchstick so that this equation remains correct?



✦ Do the following pages.

Book 1 – 21, 22, 27, 35, 36

Book 2 – 24 to 29