


GWALIOR GLORY SCHOOL

Class : V

SUMMER HOLIDAY HOMEWORK ENGLISH (2025-26)

Name : _____ Sec. : _____ Roll No. : _____ Date : _____

Q1. What are they doing?



Decide if the following statements are TRUE or FALSE:

- | | |
|---|--|
| 1. We can see hills in the background T/F | 6. The car is white T/F |
| 2. It is snowing T/F | 7. There is a church on the right side T/F |
| 3. There are birds in the sky T/F | 8. There is a river T/F |
| 4. The boy has 'Number 10' on his shirt T/F | 9. There are clouds in the sky T/F |
| 5. They are in town T/F | 10. Everybody is sad T/F |

Choose the right verb and put it into the present continuous tense: [is / am / are + verb + ing]
hold, moo, climb, lie, play, wear, try, read, smile, stand, sit, eat, drive, go play, kick

- | |
|--|
| 1. They _____ volleyball. |
| 2. She _____ a net. She _____ to catch a butterfly. |
| 3. He _____ down and he _____ a book. |
| 4. They _____ on a park bench. A cow _____ behind them. It _____.
Maybe it wants to be friends! It is a nice, friendly cow. |
| 5. He _____ a football kit and he _____ a ball. |
| 6. He _____ his car. He _____ to church. |
| 7. He _____ an ice cream. |
| 8. He _____ a ladder to have a go on the slide. |
| 9. He _____ with his toy car. |
| 10. He _____ ! They are all so happy!:) |

Q3. COMPLETING A STORY!: GOOD VALUES : HELPING OTHERS

Fill in the blanks to complete the story.

went alerted arrived felt carried
called did continued saw praised

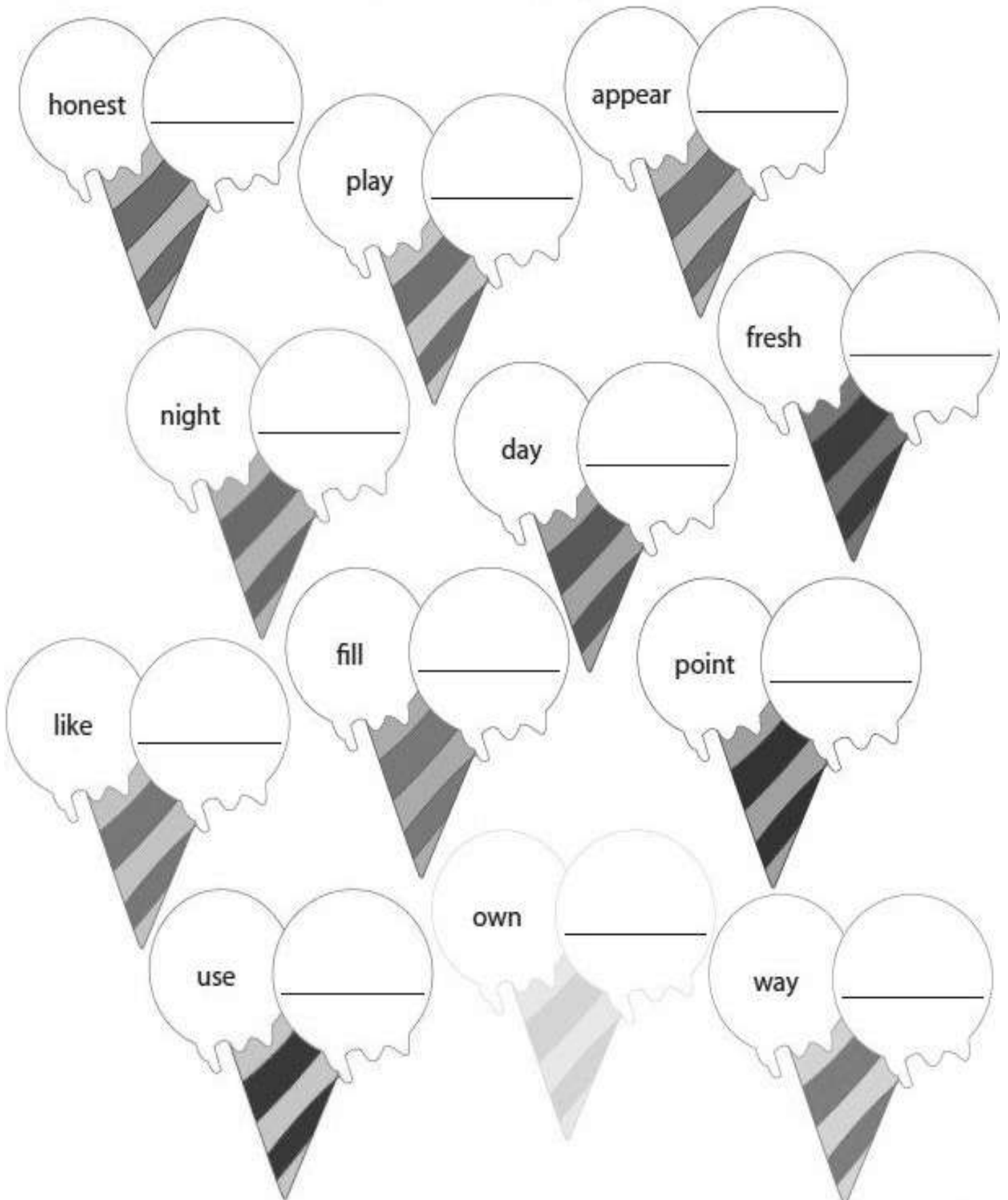


One lovely evening, Ahmad and his father _____ jogging at the park nearby their house. Suddenly, Ahmad _____ a man lying on the ground. Ahmad stopped and _____ his father. They _____ the poor man to the side of the road. The man had breathing difficulties.

Ahmad quickly _____ an ambulance. While waiting, Ahmad's father _____ CPR to help with the man's breathing. The ambulance _____ after about 15 minutes.

Apparently, the man had a mild heart attack. He was sent to the hospital immediately for further treatment. Ahmad and his father _____ jogging. His father _____ him for his quick action. It was a meaningful day for them because they have done a good deed. Ahmad and his father _____ incredibly happy.

Q4. PREFIXES: Add one of the prefixes “dis-”, or “mid-” as appropriate to each word to make a new word. Write the new word separately in the space provided.



Q5. THE GIFT OF ADVERBS AND ADJECTIVES:

If the word in the gift is an adverb, color it red. If it is an adjective color it green. Then write two sentences using at least one adjective and one adverb from the gifts.

Adjective: Describes a noun.

Adverb : Describes when, how or where.



1) _____

2) _____

Q6. The suffixes 'ER' and 'EST'

Root word	→	add ' <u>er</u> '	→	add ' <u>est</u> '
fast	→	faster	→	fastest
dark	→	_____	→	_____
tall	→	_____	→	_____
slow	→	_____	→	_____
neat	→	_____	→	_____
weak	→	_____	→	_____
small	→	_____	→	_____
old	→	_____	→	_____
smart	→	_____	→	_____
cold	→	_____	→	_____
rich	→	_____	→	_____

Find ten -er and -est words hidden in the word search.

z	d	x	y	w	z	s	c	x
f	a	s	t	e	r	m	o	y
z	r	m	a	a	i	a	l	s
o	k	a	l	k	c	r	d	l
l	e	l	l	e	h	t	e	o
d	s	l	e	r	e	e	s	w
e	t	e	r	x	s	s	t	e
r	y	r	z	x	t	t	y	r

Q7. Give the opposites for the adjectives given below and frame meaningful sentences using them.

	<u>OPPOSITE</u>	<u>SENTENCE</u>
1) dull	- _____	_____
2) interesting	- _____	_____
3) sad	- _____	_____
4) simple	- _____	_____
5) expensive	- _____	_____

GWALIOR GLORY SCHOOL

SUMMER HOLIDAY HOMEWORK

HINDI (2025-26)

Class : V

Name : _____ Sec. : _____ Roll No. : _____ Date : _____

NOTE: (1) प्रतिदिन एक पेज सुलेख लिखिए।

(2) अप्रैल माह में कराए गए कार्य को याद कीजिए।

(1) निम्नलिखित गद्यांश को पढ़कर नीचे लिखे प्रश्नों के उत्तर दीजिए।

प्रातःकाल का दृश्य अत्यंत मनमोहक होता है। सूरज निकलने से पूर्व आकाश में लालिमा छा जाती है। धीरे-धीरे सूरज पहाड़ों की गोद से निकलता जान पड़ता है। यह आकाश में पूरब दिशा से निकलता है। सूरज के निकलते ही सारा अंधकार मिट जाता है। इसकी रोशनी का मुकाबला किसी अन्य वस्तु की रोशनी नहीं कर सकती। प्रातःकाल धीमी-धीमी वायु चलती है। इस वातावरण में सैर करने से चित्त प्रसन्न हो जाता है। प्रातःकाल के समय आकाश में जादू-सा प्रतीत होता है। सभी अपना आलस त्यागकर काम-काज में लग जाते हैं।

प्र01 प्रातःकाल का दृश्य कैसा होता है?

उ0 _____

प्र02 इस वातावरण में सैर करने से क्या होता है?

उ0 _____

प्र03 दिए गए शब्दों के दो-दो पर्यायवाची लिखिए—

1. आकाश — _____

2. सूरज — _____

प्र04 दिए गए शब्दों के विलोम शब्द लिखिए—

1. पूरब — _____


2. आलसी — _____

प्र05 दिए गए शब्दों के अर्थ लिखिए—

1. अंधकार — _____

2. चित्त — _____


(2) नीचे दिए गए चित्रों के लिए दो-दो समान अर्थ वाले शब्द लिखो-




(3) दिए गए मुहावरों को उनके अर्थ के साथ डिक्शनरी फॉर्म में लिखिए-

1. आँखे दिखाना _____
2. फूला न समाना _____
3. पेट में चूहे कूदना _____
4. उल्लू बनाना _____
5. सिर ऊँचा करना _____

(4) नीचे दिए गए देशों के राष्ट्रीय झंडों के चित्र बनाइए।



भारत



चीन

(5) आप पुस्तक मेले में अपने बड़े भाई के साथ गए। अपने मित्र को पत्र लिखकर अपना अनुभव बताइए।

GWALIOR GLORY SCHOOL

SUMMER HOLIDAY HOMEWORK MATHEMATICS (2025-26)

Class : V

Name : _____ Sec. : _____ Roll No. : _____ Date : _____

1) Make the sums correct by shifting only 1 matchstick in each:-

a) $XX + V = IV$ _____

b) $VII + V = III$ _____

c) $XI - V = XI$ _____

d) $III + VI = VII$ _____

e) $IV - V = IV$ _____

2) A flower garden is divided into sections of different flowers. Choose 3 statements that are true based on the pictures.

a) Roses are in $\frac{3}{6}$ of the garden.


b) Jasmine flowers are in $\frac{1}{8}$ of the garden.

c) Marigold flowers are in $\frac{1}{8}$ of the garden.


d) Tulips are in $\frac{3}{6}$ of the garden.

e) Roses are more than the tulips.


f) Each part of the garden is $\frac{1}{8}$ of the entire garden.




- Rose



- Marigold



- Tulip



- Jasmine

3) Write all the high lengths in metres expressed as a decimal?

a) The giant Pacific Octopus is the largest octopus on earth, measuring 9m 80cm in length. _____

b) The Japanese spider crab is the largest crab on earth. It has a length of 3m 70cm.

c) The Blue Whale is the biggest animal on earth measuring about 30m. The dwarf sperm whale is smallest whale in the world. It measures only 2m 50cm. _____

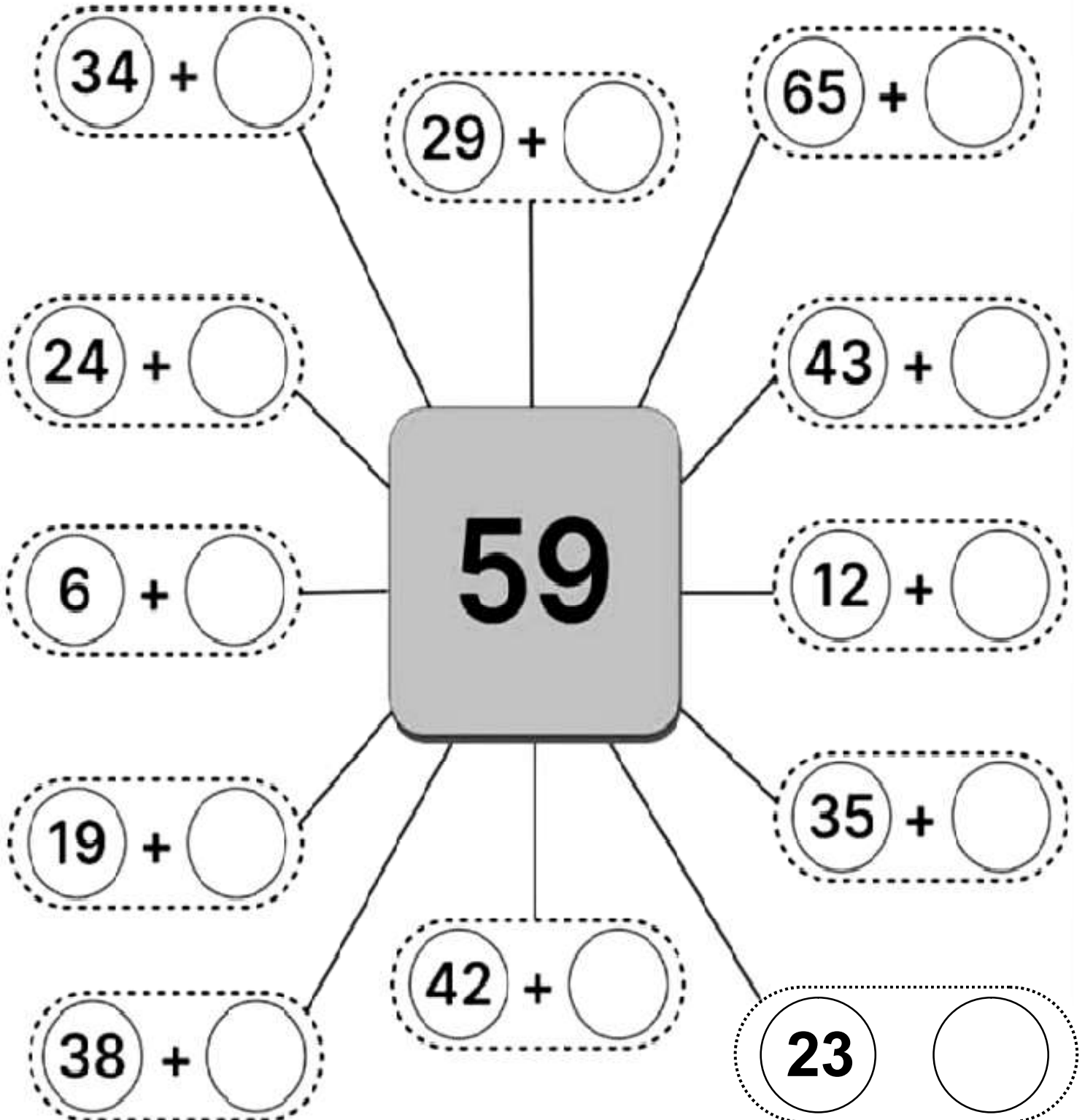
4) Find the digits represented by AB.

$$\begin{array}{r} \text{A B} \\ \times \text{B A} \\ \hline 42 \text{ A B} \\ \hline \end{array}$$












A - _____

























B - _____

5) SUM GAME: Complete the sum with the correct solution.






































6) Decode the numbers and solve the problems.

										
0	1	2	3	4	5	6	7	8	9	10

1  x  <input type="text"/> x <input type="text"/> = <input type="text"/>	2  x  <input type="text"/> x <input type="text"/> = <input type="text"/>	3  x  <input type="text"/> x <input type="text"/> = <input type="text"/>	4  x  <input type="text"/> x <input type="text"/> = <input type="text"/>
5  x  <input type="text"/> x <input type="text"/> = <input type="text"/>	6  x  <input type="text"/> x <input type="text"/> = <input type="text"/>	7  x  <input type="text"/> x <input type="text"/> = <input type="text"/>	8  x  <input type="text"/> x <input type="text"/> = <input type="text"/>
9  x  <input type="text"/> x <input type="text"/> = <input type="text"/>	10  x  <input type="text"/> x <input type="text"/> = <input type="text"/>	11  x  <input type="text"/> x <input type="text"/> = <input type="text"/>	12  x  <input type="text"/> x <input type="text"/> = <input type="text"/>

6) Decode the numbers and solve the problems.

										
0	1	2	3	4	5	6	7	8	9	10

1  x  <input type="text"/> x <input type="text"/> = <input type="text"/>	2  x  <input type="text"/> x <input type="text"/> = <input type="text"/>	3  x  <input type="text"/> x <input type="text"/> = <input type="text"/>	4  x  <input type="text"/> x <input type="text"/> = <input type="text"/>
5  x  <input type="text"/> x <input type="text"/> = <input type="text"/>	6  x  <input type="text"/> x <input type="text"/> = <input type="text"/>	7  x  <input type="text"/> x <input type="text"/> = <input type="text"/>	8  x  <input type="text"/> x <input type="text"/> = <input type="text"/>
9  x  <input type="text"/> x <input type="text"/> = <input type="text"/>	10  x  <input type="text"/> x <input type="text"/> = <input type="text"/>	11  x  <input type="text"/> x <input type="text"/> = <input type="text"/>	12  x  <input type="text"/> x <input type="text"/> = <input type="text"/>

GWALIOR GLORY SCHOOL

SUMMER HOLIDAY HOMEWORK ENVIRONMENTAL SCIENCE (2025-26)

Class : V

Name : _____ Sec. : _____ Roll No. : _____ Date : _____

- 1) As you know food gets spoiled when it is exposed to air and moisture. The method used to preserve the nutritional value of food for a long time is called food preservation.

Look around in your kitchen and find the foods preserved and methods used to preserve them and write your observation.

Food Method used to preserve

_____	_____
_____	_____
_____	_____
_____	_____

- a) How can we preserve mint leaves?

Ans. _____

- b) Name any two preservatives found in your kitchen.

Ans. _____

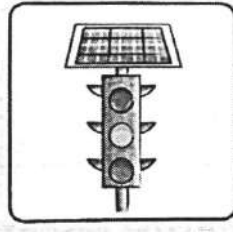

- 2) Shapes of moon.

Observe the moon for a month, watching it every second day. Record your observations as follows.

Day	Time	Draw the Shape
1	_____	
3	_____	
5	_____	

Day	Time	Draw the Shape
7	_____	
9	_____	
11	_____	

3) Name the kind of energy used in the following:-



a)

b)

c)

d)

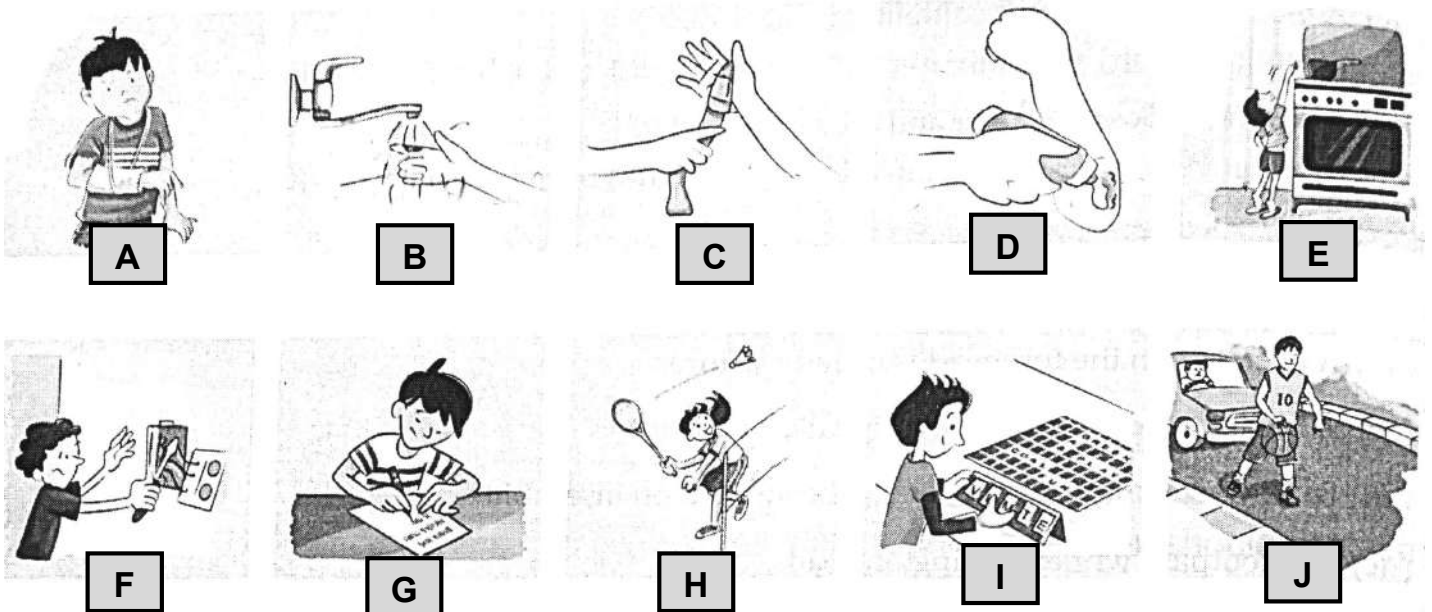
Write one more example where you use these energies:

NAME

ENERGY

- a) _____
- b) _____
- c) _____
- d) _____

4) Look at the images given below and answer the questions that follow:-



- a) In case of a small burn on the hand, in which order will you take care of it?
 (i) A→B→C→D (ii) B→D (iii) B→D→C (iv) B→D→C→A
- b) In which of these is there a possibility of someone getting an electric shock?
 (i) E (ii) F (iii) G (iv) H
- c) In which of these is there a higher possibility of someone falling down and getting hurt?
 (i) J (ii) I (iii) F (iv) G
- d) We should not do this as it may cause an accident:
 (i) F (ii) E (iii) J (iv) All of these

5) Paste the picture of an astronaut of your choice and write 5 lines about him or her.

5) Paste the picture of an astronaut of your choice and write 5 lines about him or her.

6) Solar energy is the most abundant energy source available on earth. It is also most sustainable energy source with no negative environmental impact. Solar energy is used in electricity generation, heating, drying, distillation etc. Make a model of solar panel used to generate electricity.

6) Solar energy is the most abundant energy source available on earth. It is also most sustainable energy source with no negative environmental impact. Solar energy is used in electricity generation, heating, drying, distillation etc. Make a model of solar panel used to generate electricity.

GWALIOR GLORY SCHOOL

SUMMER HOLIDAY HOMEWORK

GK (2025-26)

Class : V

Name : _____ Sec. : _____ Roll No. : _____ Date : _____

I) Let's know our country:-

- 1) _____ is the longest tributary river of India.
- 2) _____ is the biggest state of India.
- 3) _____ is the largest fresh water lake in India.
- 4) _____ is the largest river of India.
- 5) _____ is the highest dam in India.
- 6) _____ is the largest zoo in India.

II) How many: Complete the following sentences by using the Help Box.

Diamond Jubilee	Dozen	Golden Jubilee	Century	Ream
Silver Jubilee	Millennium	Fortnight	Decade	Score

- 1) A pack of 500 sheets of paper is called _____
- 2) A set of 12 dozens is called _____
- 3) A period of 14 days or 2 weeks is called _____
- 4) A set of 20 items is called _____
- 5) A period of 10 years is called _____
- 6) A period of 100 years is called _____
- 7) A period of 1000 years is called _____
- 8) 25th anniversary is called _____
- 9) 50th anniversary is called _____
- 10) The 60th anniversary is called _____

III) **FAIRY TALE CHARACTERS**: Identify these six female fairy tale characters with the help of the clues. Use the answers from the Help Box.

Cinderella

Snow White

Sleeping Beauty

Little Red Riding Hood

Thumbelina

Beauty

1) This beautiful girl went to live in the castle of a beast.

2) She went to the midnight ball in a pumpkin carriage.


3) She lived with seven dwarfs in the forest.

4) She met a bad wolf dressed up like her grandmother.

5) She is a tiny girl who came out from a flower.

6) She fell asleep for a hundred years and was woken up by a prince.

IV) **SPORTS AND THEN KITS:** Dear players, match each child of column A with their respective sports arena / stadium given in column B.

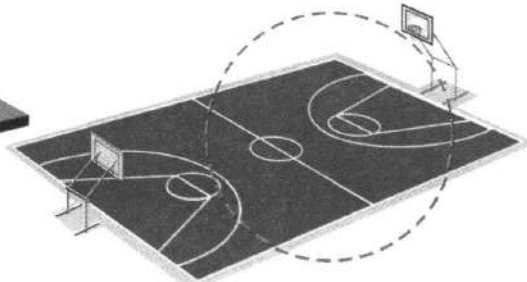
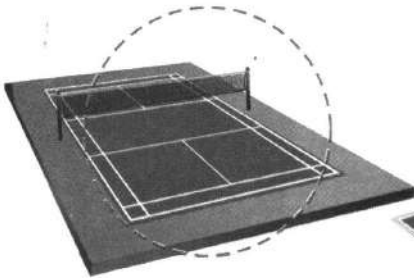

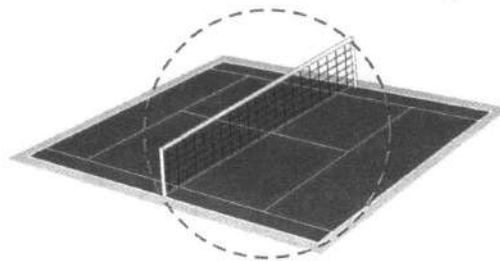
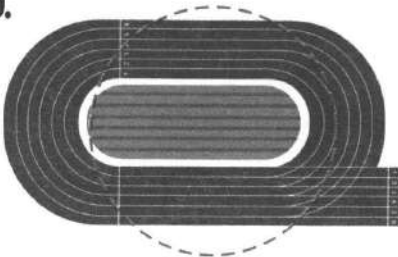


Column A.

Cricket ☆ Athletics ☆ Basketball ☆ Badminton ☆ Tennis ☆ Football ☆

Athletic Track ☆ Tennis Court ☆ Badminton Court ☆ Cricket Stadium ☆ Basketball Court ☆ Football Field ☆

Column B.



V) **SPACE TRIVIA:** Identify the picture and write their name in the provided box to solve the crossword puzzle.

1

2

3

4

5

6

7

8

9

10

11

12

13

14

15

16

17

18

19

20

21

22

23

24

25

26

27

28

29

30

31

32

33

34

35

36

37

38

39

40

41

42

43

44

45

46

47

48

49

50

51

52

53

54

55

56

57

58

59

60

61

62

63

64

65

66

67

68

69

70

71

72

73

74

75

76

77

78

79

80

81

82

83

84

85

86

87

88

89

90

91

92

93

94

95

96

97

98

99

100

Did You Know?

Fireball, Planet, Star, Spacerocket, Spaceship, UFO, Alien, Astronaut

V) **GREAT INVENTIONS:** Identify and write the scientist name in the given boxes as per their inventions.




Benjamin Franklin




Thomas Edison




Philo Farnsworth



Charles Babbage



Alexander Graham Bell



Carl Ben

1. CAR




Invented in year 1886

2. TELEPHONE



Invented in year 1876

3. COMPUTER



Invented in year 1822

4. TELEVISION



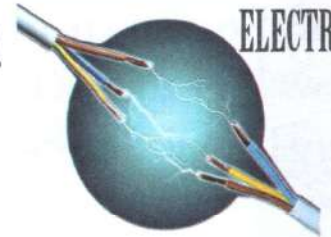
Invented in year 1927

5. BULB



Invented in year 1879

6. ELECTRICITY



Invented in mid-1700s

GWALIOR GLORY SCHOOL

Class : V

SUMMER HOLIDAY HOMEWORK COMPUTER (2025-26)

Name : _____ Sec. : _____ Roll No. : _____ Date : _____

◆ Research and Create an attractive Power Point Presentation of minimum 8 slides on below mentioned topic:- (ANY ONE)

- Famous Landmarks of India.
 - Smart Hybrid Gadget.
 - Any Two Application Software.
-

GWALIOR GLORY SCHOOL

Class : V

SUMMER HOLIDAY HOMEWORK COMPUTER (2025-26)

Name : _____ Sec. : _____ Roll No. : _____ Date : _____

◆ Research and Create an attractive Power Point Presentation of minimum 8 slides on below mentioned topic:- (ANY ONE)

- Famous Landmarks of India.
 - Smart Hybrid Gadget.
 - Any Two Application Software.
-

GWALIOR GLORY SCHOOL

Class : V

SUMMER HOLIDAY HOMEWORK COMPUTER (2025-26)

Name : _____ Sec. : _____ Roll No. : _____ Date : _____

◆ Research and Create an attractive Power Point Presentation of minimum 8 slides on below mentioned topic:- (ANY ONE)

- Famous Landmarks of India.
 - Smart Hybrid Gadget.
 - Any Two Application Software.
-

GWALIOR GLORY SCHOOL

Class : V

SUMMER HOLIDAY HOMEWORK COMPUTER (2025-26)

Name : _____ Sec. : _____ Roll No. : _____ Date : _____

◆ Research and Create an attractive Power Point Presentation of minimum 8 slides on below mentioned topic:- (ANY ONE)

- Famous Landmarks of India.
- Smart Hybrid Gadget.
- Any Two Application Software.

GWALIOR GLORY SCHOOL

Class : V


SUMMER HOLIDAY HOMEWORK (2025-26)

Art & Craft

Name : _____ Sec. : _____ Roll No. : _____ Date : _____


DRAWING

- 1) **WORKSHEET-1**: Fill in the colour and create beautiful 3D hanging.
Example Given Below:-



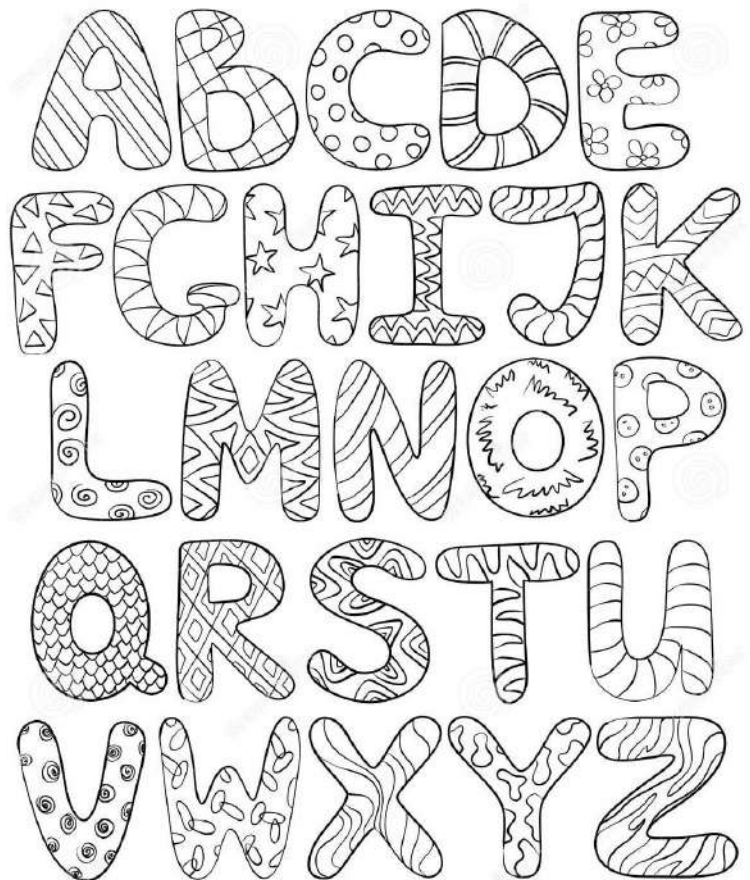

- 2) **WORKSHEET-2:** Make a cute doodle art dog painting or floppy ears using or template. Link: <https://pin.it/5uuRg9L3M>

Example Given Below:-



- 3) **WORKSHEET-3:**
Write your name using the alphabets given below.

Example:-



- 4) Draw a warli art painting.

Note: All work should be done by A-4 Size Sheet